



INDIAN SCHOOL MUSCAT
MIDDLE SECTION
DEPARTMENT OF SOCIAL SCIENCE
SECOND SUMMATIVE ASSESSMENT-2016-17

STD: V

Time: 2 Hours

Date: 13.03.2017

SOCIAL SCIENCE

Max. Marks: 60

GENERAL INSTRUCTIONS:

- ❖ All the questions must be answered on the answer script provided.
- ❖ Indicate the different points of the answers with an asterisk (*).
- ❖ Write only answers for Objective Section. Write them with the correct question numbers.
- ❖ Attach the map sheet with the answer script.
- ❖ This question paper has 4 printed sides.

PART I
SECTION A

I. FILL IN THE BLANKS (1/2×4=2)

- The chief means of water transport in DRC is _____ river.
- Oman is located in the south eastern part of the _____ Peninsula.
- Strong winds and dust storms shift the _____ from one place to another.
- The Mississippi and the _____ rivers provide water for irrigation in the Prairies.




II. NAME THE FOLLOWING (1/2 ×4=2)

- The country called the ‘Natural Zoo of the World’ _____
- Highest mountain range of Oman _____
- Main source of wealth for Saudi Arabia _____
- Big storage bins used for storing food grains _____

III. MATCH THE FOLLOWING (1/2 ×4=2)

S.NO.	COLUMN A		COLUMN B	ANSWERS
1	Largest tribe in DRC	a	Frankincense	1.
2	Olibanum	b	Pygmies	2.
3	Staple food of DRC	c	Bantu	3.
4	Omani cap	d	Cassava	4.
		e	Kumah	

IV. OBSERVE THE GIVEN PICTURES & ANSWER THE QUESTIONS (1 ×3=3)

		
<p>1. The ornamental dagger worn in Oman is _____.</p>	<p>2. _____ is a farmhouse in the Prairies.</p>	<p>3. An _____ is a fertile place in a desert where underground water comes to the surface.</p>

V. MARK & LABEL THE FOLLOWING ON THE GIVEN MAPS

($\frac{1}{2} \times 6 = 3$)

A. On the outline map of Gulf Countries

1. Tropic of Cancer
2. Mecca
3. Riyadh
4. Oman

B. On the outline map of the World

5. Prairies
6. Downs

SECTION B

VI. NAME THE FOLLOWING

($\frac{1}{2} \times 4 = 2$)

1. He declared, "Freedom is my birthright and I shall have it." _____
2. Khan Abdul Gaffar Khan was popularly known as: _____
3. The Azad Hind Fauj was organised by _____
4. The movement in which Indians resigned from government posts, stopped paying taxes and boycotted foreign goods: _____

VII. IDENTIFY THE PERSONALITIES AND FILL IN THE BLANKS

($\frac{1}{2} \times 4 = 2$)



- a) _____ a retired ICS officer
founded the _____
_____ in 1885.



- b) _____ became the first
_____ of free India.

SECTION C

VIII. CHOOSE & WRITE THE CORRECT ANSWER

($\frac{1}{2} \times 4 = 2$)

1. The largest body of the UN
a. Security Council b. General Assembly c. Secretariat
2. The Security Council has _____ permanent members
a. 15 b. 10 c. 5
3. Largest democracy in the world
a. South Africa b. India c. Egypt
4. The name given to the rivalry between USA and USSR without waging a war after World War II
a. Apartheid b. Cold War c. Non-Alignment

IX. NAME THE FOLLOWING

($\frac{1}{2} \times 2 = 1$)

1. First woman to be elected President of UN General Assembly _____
2. Policy adopted by Jawaharlal Nehru to stop groupism among countries _____

X. FILL IN THE BLANKS

($\frac{1}{2} \times 2 = 1$)

1. The _____ has helped India to fight against diseases.
2. The FAO has helped to change the desert area of Rajasthan into a _____ area.

XI. OBSERVE THE GIVEN PICTURES & ANSWER THE QUESTIONS

($1 \times 2 = 2$)



a) Name this special agency of UN (write its full form)



b) Name the present UN Secretary General

PART II

SECTION A

XII. GIVE ONE REASON FOR EACH OF THE FOLLOWING STATEMENTS ($1 \times 3 = 3$)

1. The Prairies are called the 'Wheat Basket of the World'.
2. Saudi Arabia has a shortage of fresh water.
3. River Congo is called the 'Highway of Central Africa'.

XIII. ANSWER THE FOLLOWING IN ONE POINT

($1 \times 3 = 3$)

1. What are the main occupations of people in DRC?
2. What do you know about Al Batinah Plain in Oman?
3. What are ranches?

XIV. ANSWER THE FOLLOWING IN TWO POINTS

($2 \times 2 = 4$)

1. When is the National Day of Oman celebrated? What is its significance?
2. Why is cattle rearing important in the hilly west?

XV. ANSWER THE FOLLOWING IN FOUR POINTS

($4 \times 2 = 8$)

1. a. Describe the vegetation found in the Democratic Republic of Congo

OR

b. What do you know about the Pygmies who live in DRC?

2. a. Briefly describe the Bedouins

OR

b. Write a short note on the climate of Saudi Arabia

SECTION B

XVI. ANSWER THE FOLLOWING IN ONE POINT **(1×2=2)**

1. What was the Swadeshi Movement?
2. What were the two most powerful weapons Gandhiji used to free India?

XVII. ANSWER THE FOLLOWING IN TWO POINTS **(2×2=4)**

1. Explain the 'divide and rule' policy of the British
2. Why did the Simon Commission fail?

XVIII. ANSWER THE FOLLOWING IN FOUR POINTS **(4×2=8)**

1. a. Describe the Swadeshi Movement
OR
b. Discuss the role of social reformers

2. a. Write a short note on the Jallianwala Bagh Massacre.
OR
b. What do you know about the Dandi March?

SECTION C

XIX. ANSWER THE FOLLOWING IN ONE POINT **(1×2=2)**

1. State the topmost priority of UNICEF for the children of the world
2. What type of education does UNESCO provide in backward countries?

XX. ANSWER THE FOLLOWING IN TWO POINTS **(2×2=4)**

1. Give the full form of ILO. What is the main role of ILO?
2. List any two achievements of the United Nations

INDIAN SCHOOL MUSCAT
MIDDLE SECTION

NAME _____ STD V __ ROLL NO __ INVIGILATOR'S SIGN _____

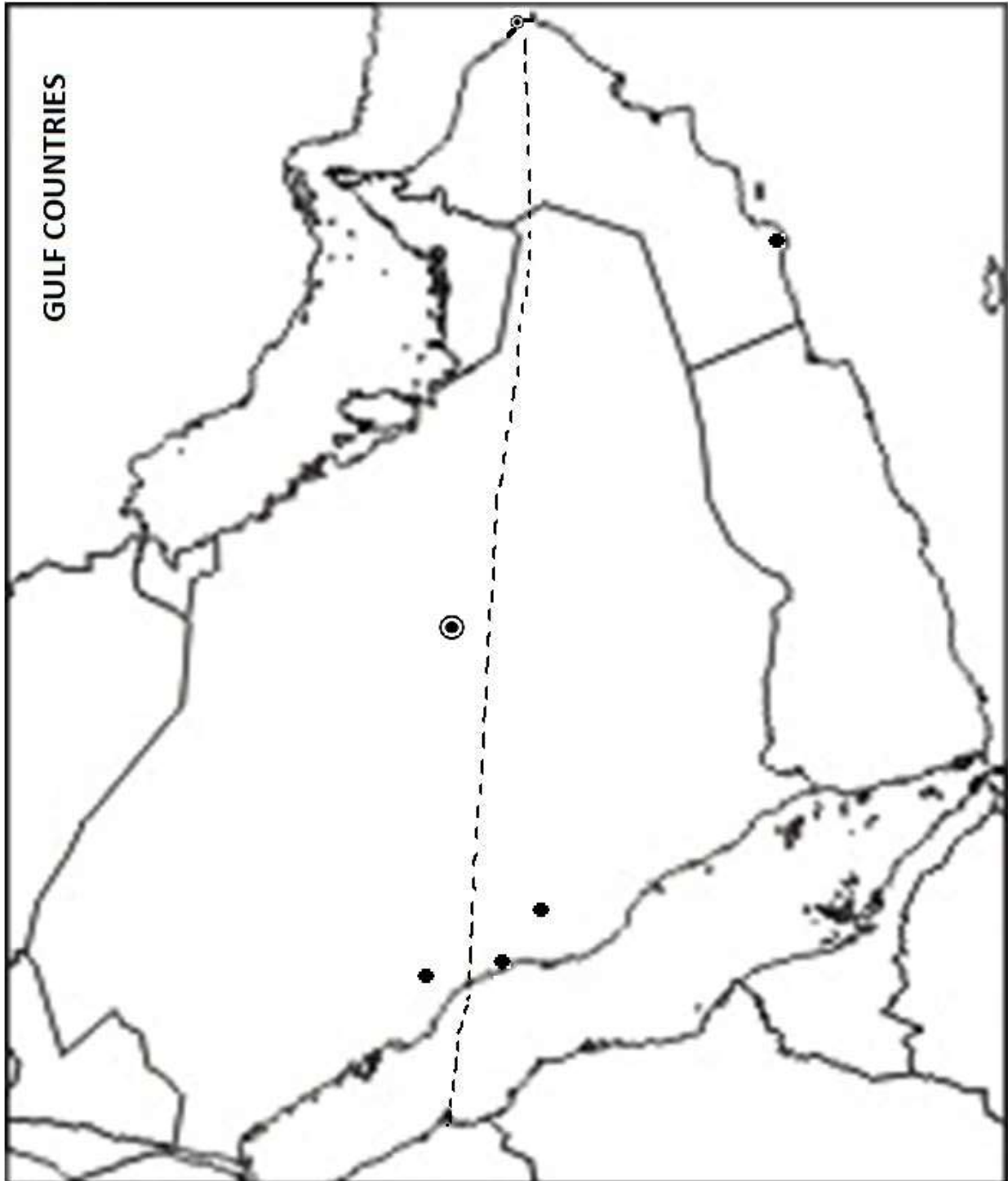
V. A. On the given outline map of the Gulf Countries MARK & LABEL: (½ ×4=2)

1. TROPIC OF CANCER

2. MECCA

3. RIYADH

4. OMAN



B. On the given outline map of the World SHADE & LABEL:

($\frac{1}{2} \times 2 = 1$)

1. Prairies

2. Downs

